





Date: 25/03/2022
GRADE: III

CPE - 04 (2021-22)
Science

Max marks: 25
Time: 2 Hours

Section A		
SL No	Circle The Correct Answer	Marks
1	<p>Which among the following is a luminous object?</p> <div style="display: flex; justify-content: space-around; align-items: flex-start;"> <div style="text-align: center;">  A </div> <div style="text-align: center;">  B </div> </div> <div style="display: flex; justify-content: space-around; align-items: flex-start; margin-top: 20px;"> <div style="text-align: center;">  C </div> <div style="text-align: center;">  D </div> </div> <p>A) Chair B) Tree C) Cup D) Light</p>	1
2	<p>Thread like part of some vegetable is called _____</p> <p>A) Water B) Fibre C) Fat D) None of these</p>	1
3	<p>John went to the zoo with his parents and he saw a lion inside the cage. On seeing the crowd of people the lion made a sound. Identify the sound made by the lion.</p> <p>A) Purr B) Roar C) Bray D) Hiss</p>	1

4	<p>The hottest planet of our solar system is</p> <p>A) Earth</p> <p>B) Sun</p> <p>C) Venus</p> <p>D) Moon</p>	1
---	---	---

5	<p>A seed grows into a new plant is called</p> <p>A) Seedling</p> <p>B) Germination</p> <p>C) Root</p> <p>D) All of these</p>	1
---	---	---

Section B		
------------------	--	--

Match the following		
----------------------------	--	--





6	<table border="1" style="margin-left: auto; margin-right: auto;"> <tr> <td data-bbox="331 1086 699 1169">A) Elephant</td> <td data-bbox="699 1086 1203 1169">A) Dwarf Planet</td> </tr> <tr> <td data-bbox="331 1169 699 1274">B) Sun</td> <td data-bbox="699 1169 1203 1274">B) Thin lines in leaves</td> </tr> <tr> <td data-bbox="331 1274 699 1357">C) Vein</td> <td data-bbox="699 1274 1203 1357">C) Bodybuilding</td> </tr> <tr> <td data-bbox="331 1357 699 1440">D) Protein</td> <td data-bbox="699 1357 1203 1440">D) Natural Source of light</td> </tr> <tr> <td data-bbox="331 1440 699 1523">E) Pluto</td> <td data-bbox="699 1440 1203 1523">E) Trumpet</td> </tr> </table>	A) Elephant	A) Dwarf Planet	B) Sun	B) Thin lines in leaves	C) Vein	C) Bodybuilding	D) Protein	D) Natural Source of light	E) Pluto	E) Trumpet	5
A) Elephant	A) Dwarf Planet											
B) Sun	B) Thin lines in leaves											
C) Vein	C) Bodybuilding											
D) Protein	D) Natural Source of light											
E) Pluto	E) Trumpet											


Identify whether the statement is true/false		
---	--	--

7	<p>The moon has rocky surfaces and deep holes.</p> <p>A) True</p> <p>B) False</p>	1
---	---	---

8	<p>The image shown below is a healthy food.</p> <p>A) True</p> <p>B) False</p>	1
---	--	---



9	<p>Roots absorb water and nutrients from the soil.</p> <p>A) True</p> <p>B) False</p>	1
10	<p>Different animals make the same sound.</p> <p>A) True</p> <p>B) False</p>	1
11	<p>Unpleasant sounds do not harm our ears.</p> <p>A) True</p> <p>B) False</p>	1
Answer in one Sentence		
12	<p>What do you mean by protective food ?</p> <hr/> <hr/> <hr/>	1
13	<p>Observe the pictures and write the names of animals and their homes they live in.</p> <div style="display: flex; justify-content: space-around; align-items: flex-start;"> <div style="text-align: center;">  <p>A</p> </div> <div style="text-align: center;">  <p>B</p> </div> <div style="text-align: center;">  <p>C</p> </div> <div style="text-align: center;">  <p>D</p> </div> </div>	1

	<p>A) _____</p> <p>B) _____</p> <p>C) _____</p> <p>D) _____</p>	
14	<p>Differentiate between Luminous and Non-luminous objects?</p> <p>_____</p> <p>_____</p> <p>_____</p>	1
15	<p>Name two constellations.</p> <p>_____</p> <p>_____</p>	1
Answer the Questions in two sentences		
16	<p>Label the parts of the plant.</p>  <p>A) _____</p> <p>B) _____</p>	2

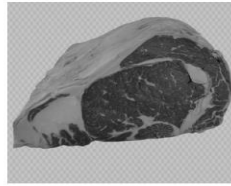
C) _____

D) _____

17

Name two energy giving and two body building food items.

2



18

Name the planets which move around the sun in the correct order.

2
